





Tomato Fest! Reading a Pictograph

Harvest season has begun, and the farmers are busily picking their tomatoes. The numbers of tomatoes are shown in the pictograph below. Note: each tomato in the pictograph stands for 5 tomatoes picked. Use the information provided to answer the questions.

Day	Picked Tomato
Day 1	
Day 2	
Day 3	
Day 4	

Questions:

 = 5 tomatoes

1. How many tomatoes did the farmer pick on the first day?

Answer: _____

2. What day did the farmer pick the most tomatoes?

Answer: _____

3. Which days did the farmer pick the same amount of tomatoes? How many did he pick in total both of those days?

Answer: _____

4. What's the difference between the number of tomatoes picked on Day 3 and Day 4?

Answer: _____

5. How many tomatoes in total did he pick for this season?

Answer: _____